



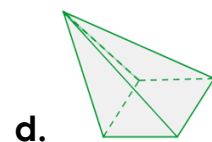
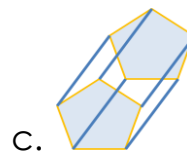
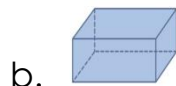
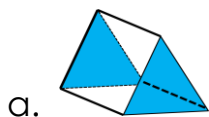
Sarasas Witaed Chiang Mai School
1st QC Study Questions (Mini-Bilingual)
Semester 1 Academic Year 2019
Mathayom 3

Language:

1. Spell the word “**exercise freak**” **E-X-E-R-C-I-S-E F-R-E-A-K**
2. Jimmy likes to go to the gym every day. He is _____.
a. game-addict **b. exercise freak** c. hardworking d. shopaholic
3. Jessica never eats meats. She is _____.
a. vegetarian b. hardworking c. beauty-loving d. hate exercise
4. Kenji spends most of his free time playing video games. He is _____.
a. He feels good. b. He hates the exercise.
c. a game-addict. d. He's a shopaholic.
5. Martin works very hard. He rarely takes a vacation. He is _____.
a. game-addict b. exercise freak **c. hardworking** d. shopaholic

Mathematics:

1. Which of the following is NOT a prism?



2. The surface area of a triangular prism is
a. Area of 2 triangles + Area of 3 rectangles
a. Area of 3 triangles + Area of 3 rectangles
b. Area of a circle + Area of a rectangle
c. Area of 3 triangles + Area of a square
3. The area of a triangle is
a. Length x width **b. $\frac{1}{2}$ base x height**
b. c. πr^2 d. radius x height

4. _____ of a solid is the amount of anything you can put in it.
 a. Prism **b. volume** c. height d. base
5. The volume of any prism is _____
 a. Base area x height b. area of all shapes
 a. c. length x height d. πr^2

Science:

1. What do we call animals that eat both plants and meat?
 a. Omnivores b. carnivores
 c. herbivores d. both a and c
2. Refers to all biological and physical components in an area and their interactions with each other?
 a. Nervous system **b. Ecosystem**
 c. Food chain d. Food pyramid
3. Refers to the introduction of harmful substances or products into the environment.
 a. Pollution b. Ecosystem
 c. Food chain d. Food pyramid
4. An organism that that feeds on other animals or plants.
 a. Omnivores b. carnivores
 c. herbivores **d. consumer**
5. These are examples of decomposers.
 a. Jellyfish b. orchids
 c. ferns **d. bacteria and fungi**

Social Studies:

1. When did Buddhadasa Bhikku died?
 a. May 25, 1993 b. June 25, 1993
 c. May 28, 1993 d. May 25, 1963
2. When is YBAT day?
 a. October 27th b. September 28th
c. October 26th d. January 1st

3. The famous Sri Lankan Pali scholar that initiated and inspired WFB
 - a. Dr. Ravikhadon
 - b. Dr.Malalasekera
 - c. Mr.Luang Poh
 - d. Viriyang Sirintharo
4. He became the first president of YBAT.
 - a. Colonel Thong -Kham Sriyotin
 - b. Dr.Malalasekera
 - c. Mr.Luang Poh
 - d. Viriyang Sirintharo
5. The place named "Suan Mokkhabalarama" meaning the garden of?
 - a. Power and liberation
 - b. mindfulness
 - c. relaxation
 - d. love

Health Education:

1. What pubescent changes affect all teens?
 - a. hips and breast
 - b. cracked voice and sperm
 - c. pregnancy and hair
 - d. pimples and pubic hair
2. What is a possible consequence of having sex?
 - a. wet dream
 - b. deodorant
 - c. pregnancy
 - d. menstruation
3. Which is an example of the six guidelines for making responsible decisions?
 - a. Is it helpful?
 - b. Is it sweet?
 - c. Do I love her?
 - d. Do I follow my heart?
4. Which is a mental change that teens experience?
 - a. skin changes
 - b. broader shoulder
 - c. understanding abstract ideas
 - d. breasts get larger
5. Which of the following changes occur in girls only during puberty?
 - a. wet dreams
 - b. menstruation
 - b. shoulders become broaden
 - d. voice becomes deeper